

Hello to both parents and students of 3rd Class!

We hope you are all keeping well and safe during these strange times we yet again find ourselves in. We hope you all had a lovely Christmas and New Year.

We are very sad that we start our 2021 apart, however, it is definitely for the best. We look forward to catching up with you all over the course of the week, before we get back into our online learning routine from Thursday.

However, in the meantime, we have attached some activities below to keep you going and ease you back into school life.

Chat to you soon,

Ms Quinn & Ms Aoibheann 😊

EACH DAY YOU SHOULD AIM TO READ FOR AT LEAST 20 MINUTES

Monday 11th January 2020

1. **English** - Write a recount of your Christmas or New Years.

Remember we always write recounts in the past tense and we tell the reader about something that happened to us. We use lots of adjectives (describing words) and we write in our lovely joint handwriting, making sure we include a title and a date.

Here are some prompts that you could include in your writing to help you:

-How did you spend Christmas/New Years?

-Who did you spend it with?

-What made this Christmas/New Year's special or different?

You can draw a picture to go with it too if you like.

2. **Maths** - On the next page is a fun maths activity to explore at home. Try your best to answer each of these maths questions, you can answer on a blank page and put the question number beside.

3. **Gaeilge**- On the next page, I have put some 'Mé Féin' revision. Have a read over the notes and then try to answer the questions asked out loud and then fill in the blanks on a piece of paper.

4. **PE** - **MOVE MONDAY** - Get outdoors on a walk or run for at least 30 minutes.

Maths Day 1

Maths All Around Me at Home

1. Draw a map of your journey home from school.



Write directions to describe your journey.

2. How many lights are in your house?

Estimate: _____ Actual number: _____

3. Make a list of items you can find in your house for each shape.

square	triangle	circle	rectangle	oval	hexagon


4. Find 5 things that are about 1 metre long.


5. If your family doubled, how many would be in your family? _____

6. If you won €1000, what are the first 5 things you would buy for your home?


7. How long until you will be going to bed?

8. How long until you will be waking up tomorrow?

9. Find 3 examples of parallel lines. 

10. Find 3 examples of perpendicular lines. 

Gaeilge Day 1




Mé Féin

Cén aois thú?

- Cúig/sé bliana d'aois (5 / 6)
- Seacht/ocht/naoi/deich mbliana d'aois (7 / 8 / 9 / 10)
- Aon bhliain déag d'aois/ Dhá bhliain déag d'aois (11 / 12)
- Trí bliana déag d'aois (13)



Tá mé go maith inniu.
Níl mé go maith inniu.



Míonna na bliana:


- Mí Eanáir
- Mí Feabhra
- Mí an Mhárta
- Mí Aibreáin
- Mí na Bealtaine
- Mí an Mheithimh
- Mí Iúil
- Mí Lúnasa
- Mí Mheán Fómhair
- Mí Dheireadh Fómhair
- Mí na Samhna
- Mí na Nollag

Dath súile:







Gorma
Glása
Donna

Dath gruaige:


Dhonn



Fhionn








Rua


Dhubh


Órdhonn


Fhionnrua




<p>Cad is ainm duit? Cé thusa?</p>	<p>_____ is ainm dom. Is mise _____.</p>	
<p>Cén aois thú?</p>	<p>Tá mé _____ d'aois.</p>	
<p>Cathain atá do bhreithlá?</p>	<p>Tá mo bhreithlá i mí _____.</p>	
<p>Cén dath atá ar do shúile?</p>	<p>Tá súile _____ agam</p>	
<p>Cén dath atá ar do chuid gruaige?</p>	<p>Tá gruaig _____ orm.</p>	
<p>Conas atá tú inniu?</p>	<p>Tá mé go maith inniu. Níl mé go maith inniu.</p>	

Fill in the blanks, use the poster on top to help you.

Tuesday 12th January 2020

1. **English** - Watch the video below, it is a lovely story called 'I Wish you Happiness' that nicely describes what I wish for you guys for 2021.

<https://m.youtube.com/watch?v=iDJyg-1SAHg>

When you have watched the video, I would like you to respond to the question below. Keep your answer safe and we will discuss them in our live class meeting on Thursday.

'What wishes do you have for yourself and your classmates for 2021?'

2. **Maths** - On the next page is some multiplication revision. You can write the sums on a page and answer them. If you are looking for a challenge, time yourself doing each row of sums and try to beat your score each time. Good luck!

3. **Gaeilge**- Today's Gaeilge is similar to yesterdays, this time you are focusing on 'Mo Chlann'. You will need to read the poster and then to fill in the blanks.

4. **PE** - TIDY TUESDAY

Stay on your feet for at least 30 minutes by tidying or helping out around the house.

Keep note of what you did so you can tell on Thursday.

Maths Day 2

Ultimate Times Table Challenge

$2 \times 2 =$	$4 \times 2 =$	$8 \times 5 =$	$3 \times 10 =$	$5 \times 6 =$	$12 \times 2 =$
$10 \times 4 =$	$2 \times 8 =$	$12 \times 10 =$	$5 \times 5 =$	$9 \times 2 =$	$3 \times 5 =$
$6 \times 10 =$	$7 \times 2 =$	$8 \times 10 =$	$5 \times 10 =$	$1 \times 2 =$	$9 \times 10 =$
$11 \times 2 =$	$6 \times 2 =$	$5 \times 1 =$	$0 \times 2 =$	$10 \times 2 =$	$11 \times 5 =$
$3 \times 2 =$	$5 \times 0 =$	$2 \times 4 =$	$5 \times 4 =$	$0 \times 10 =$	$7 \times 5 =$
$2 \times 1 =$	$6 \times 5 =$	$10 \times 9 =$	$2 \times 9 =$	$2 \times 7 =$	$5 \times 9 =$
$5 \times 3 =$	$5 \times 2 =$	$10 \times 12 =$	$2 \times 10 =$	$10 \times 11 =$	$4 \times 5 =$
$10 \times 1 =$	$5 \times 8 =$	$5 \times 7 =$	$2 \times 11 =$	$5 \times 11 =$	$8 \times 2 =$
$9 \times 5 =$	$2 \times 6 =$	$1 \times 5 =$	$1 \times 10 =$	$2 \times 3 =$	$2 \times 12 =$
$10 \times 5 =$	$4 \times 10 =$	$10 \times 0 =$	$2 \times 5 =$	$10 \times 7 =$	$12 \times 5 =$
$11 \times 10 =$	$10 \times 6 =$	$5 \times 12 =$	$10 \times 10 =$	$10 \times 3 =$	$10 \times 8 =$
$7 \times 10 =$	$12 \times 10 =$	$2 \times 3 =$	$12 \times 5 =$	$10 \times 12 =$	$4 \times 10 =$
$5 \times 5 =$	$9 \times 2 =$	$3 \times 5 =$	$10 \times 10 =$	$5 \times 0 =$	$10 \times 1 =$
$2 \times 8 =$	$7 \times 2 =$	$5 \times 6 =$	$6 \times 3 =$	$12 \times 10 =$	$1 \times 5 =$

Gaeilge Day 2



Mo Chlann

Cé mhéad?

Duine amháin	Beirt	Triúr	Ceathrar	Cúigear
Seisear	Seachtar	Ochtar	Naonúr	Deichniúr

Is **páiste aonair** mé.



Tá **beirt** deartháireacha agam.



Tá **ceathrar** deirfiúracha agam.



Máire is ainm do mo Mhamaí.









Tomás is ainm do mo Dhaidí.



Is **mise** an duine is óige sa chlann.

Is **mise** an duine is sine sa chlann.

Cé mhéad duine i do theaghlach?	Tá _____ i mo theaghlach/chlann.	
Cé mhéad deartháir atá agat?	Níl aon deartháireacha agam. Tá deartháir amháin agam. Tá _____ deartháireacha agam.	
Cé mhéad deirfiúr atá agat?	Níl aon deirfiúracha agam. Tá deirfiúr amháin agam. Tá _____ deirfiúracha agam.	
Cad is ainm do do Mhamáí/ Dhaidí?	_____ is ainm do mo Mhamáí. _____ is ainm do mo Dhaidí.	
Cé hé an páiste is sine i do chlann?	Is é _____ an páiste is sine sa chlann. Is í _____ an páiste is sine sa chlann.	
Cé hé an páiste is óige i do chlann?	Is é _____ an páiste is óige sa chlann. Is í _____ an páiste is óige sa chlann.	

Fill in the blanks to answer the questions 😊

Wednesday 13th January 2020

1. **English** - Free Writing - write about anything you like.

Make sure to focus on capital letters, full stops and be sure to use lots of adjectives.

You can draw a picture to go with it too if you like.

2. **Maths** - On the next page is some multiplication word problems. Try to answer each one. For example:

Question - Antonios gave each child in the class two sweets each, how many sweets did he need to bring in if there were 12 children in the class.

Answer - $12 \times 2 = 24$

3. **Gaeilge**- Gaeilge today will be the same layout as Monday and Tuesday except for today we focus on 'Ar Scoil'.

4. **PE** - WELLNESS WEDNESDAY

Meditate or do some yoga today for at least 15 minutes.

See cosmic yoga on YouTube for ideas.

MATHS DAY 3

One-Step Multiplication Word Problems

1. A teacher asks some children to arrange some chairs into 12 rows of eight chairs. How many chairs will be laid out? _____
2. A crate contains 32 packs of four water bottles. How many bottles are there on each crate? _____
3. A photo album contains 28 pages. Each page can hold six photos. How many photos can each album hold? _____
4. A grocer has 37 packs of bananas. Each pack contains seven bananas. How many bananas are in the packs? _____



5. Marbles are sold in bags of 25. A shop has 16 bags. How many marbles are there altogether? _____
6. A badminton tournament is arranged at a local sports hall. There are 5 courts. Each court is allocated 18 shuttlecocks. How many shuttlecocks are allocated to the 5 courts? _____
7. Envelopes are sold in packs of ten. A supplier has 107 packs of envelopes. How many envelopes has the supplier? _____
8. A library has 50 shelves. Each shelf has 38 books. How many books are there in the library? _____



GAEILGE - DAY 3



Mo Scoil



Cén rang?

Naíonáin Shóisearacha	Rang a hAon	Rang a Trí	Rang a Cúig
Naíonáin Shinsearacha	Rang a Dó	Rang a Ceathar	Rang a Sé









Iníon _____ is ainm do mo mhúinteoir/Phríomhoide.



Máistir _____ is ainm do mo mhúinteoir/Phríomhoide.

Cén t-ábhar?

Gaeilge	Béarla	Matamaitic	Drámaíocht	Stair
Tíreolaíocht	Eolaíocht	Ceol	Ealaín	Corpoideachas

Cén rang ina bhfuil tú?	Tá mé i rang a _____.	
Cad is ainm do do mhúinteoir?	_____ is ainm dó. _____ is ainm di.	
Cad is ainm don phríomhoide?	_____ is ainm dó. _____ is ainm di.	
Cén t-ábhar is fearr leat?	Is fearr liom _____.	
Cén t-ábhar nach maith leat?	Ní maith liom _____.	
Cad a imríonn tú ag am lóin?	Imrím _____ ag am lóin.	

Fill in the blanks ^.